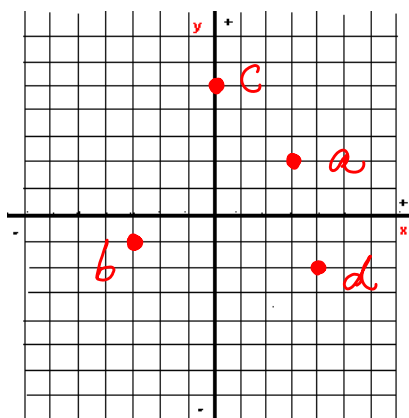


The Coordinate System is Our Friend—Pre-Test

1. Define the following terms in your own words:
 - a. Cartesian coordinate system A plane created by intersecting two number lines perpendicularly at the origin and used to plot the location of an ordered pair.
 - b. Ordered pair Two real numbers that give the distance of a point from the origin and represented by the notation (x, y) .
 - c. Solution to an equation An ordered pair, (x, y) that results in a true statement when replacing the variables x and y in an equation.
2. Plot the following ordered pairs on the Cartesian coordinate system and name the quadrant or axes where each point is located.

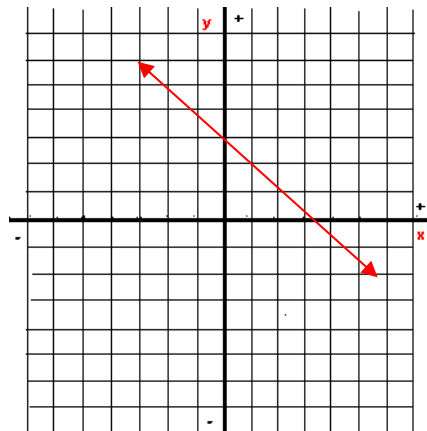
- a. $(3, 2)$ Quadrant I
- b. $(-3, -1)$ Quadrant III
- c. $(0, 5)$ y -axis
- d. $(4, -2)$ Quadrant IV



3. Determine if the ordered pair $(2, 4)$ is a solution to the equation $3x - 2y = -1$.

The ordered pair $(2, 4)$ is not a solution to the equation $3x - 2y = -1$.

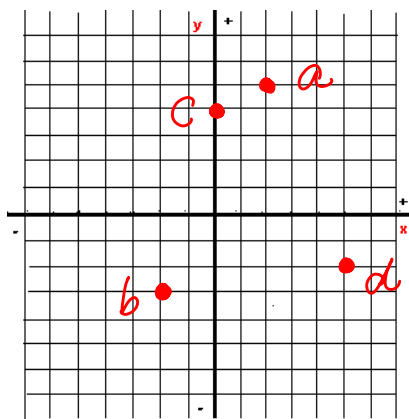
4. Graph the equation $y = -x + 3$ by plotting points.



The Coordinate System is Our Friend—Post-Test

1. Define the following terms in your own words:
 - a. Cartesian coordinate system A plane created by intersecting two number lines perpendicularly at the origin and used to plot the location of an ordered pair.
 - b. Ordered pair Two real numbers that give the distance of a point from the origin and represented by the notation (x, y) .
 - c. Solution to an equation An ordered pair, (x, y) that results in a true statement when replacing the variables x and y in an equation.
2. Plot the following ordered pairs on the Cartesian coordinate system and name the quadrant or axes where each point is located.

- a. $(2, 5)$ Quadrant I
- b. $(-2, -3)$ Quadrant III
- c. $(0, 4)$ y -axis
- d. $(5, -2)$ Quadrant IV



3. Determine if the ordered pair $(1, 3)$ is a solution to the equation $2x - 3y = -1$.

The ordered pair $(1, 3)$ is not a solution to the equation $2x - 3y = -1$.

4. Graph the equation $y = -x + 5$ by plotting points.

